

9/24/5

Name		Roll Number	
------	--	-------------	--



**INDIAN SCHOOL MUSCAT
MIDDLE SECTION
FIRST PERIODIC TEST 2018-19**



SOCIAL SCIENCE - SET B

Code: MWSS14

CLASS: V

Time Allotted: 40 min.

27.05.2018

Max .Marks: 20

Marks obtained:

General Instructions :

1. All questions are compulsory.
2. All answers should be written in the question paper.

Qns

Marks

1 FILL IN THE BLANKS :

4

- a) A _____ helps us to locate places on maps and globes.
- b) Norway and Greenland where the sun stays in the sky throughout the night and the day, are known as the _____
- c) The _____ run from the North Pole to the South Pole.
- d) North, south, east and west are the four _____ directions.

2 NAME THE FOLLOWING:

3

- a). The climatic condition near the sea. _____
- b) The ratio of actual distance shown on the map to the actual distance on ground.

- c) It divides the earth into the Northern and Southern Hemisphere. _____

3 MATCH THE FOLLOWING:

3

A	B	ANSWERS
1.Frigid zones	a. Tropic of Capricorn	1) _____
2.The latitude of $66\frac{1}{2}^{\circ}$ N	b. Very Cold	2) _____
3.The latitude of $23\frac{1}{2}^{\circ}$ S	c. Arctic circle	3) _____

ANSWER THE FOLLOWING QUESTIONS IN ONE POINT:

- 4 How does the distance from the sea affect the climate of a place?

1

19/24/5

5 State one use of the Globe?

1

6 What are the elements of a map?

1

DRAW THE STANDARD SYMBOLS USED IN MAPS

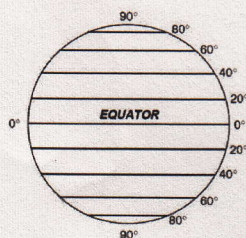
2

7 Bridge _____

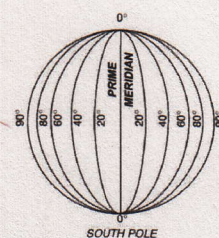
Boundary between states _____

8 **IDENTIFY THE FOLLOWING AND FILL THE BLANKS:**

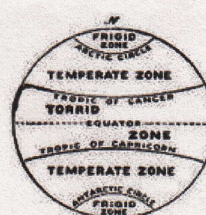
3



1. An imaginary line that circles the Earth midway



2. The 180 longitude is known as _____



3. The Heat Zones are also known as _____

9 **LABEL THE FOLLOWING IN THE GIVEN MAP.**

2

1. _____

2. _____

